

## Make That Invisible! Refractive Index Matching

TeachEngineering

Project

Determine the refractive index of a liquid with a simple technique using a semi-circular hollow block.













### Suggested Learning

Time 3 : 15 Cost 0.00

### PreRequisites

### Requirements

### Skills

	Focus	Level	Standard	Points
 Applied Science			<a href="#">NGSS</a>	13
 Written Communication			<a href="#">CC</a>	4
 Mathematics			<a href="#">CC</a>	4
 Teamwork				4
<b>Total Skill Points</b>				<b>25</b>

### Knowledge Gain

Determine the relationship of the angle of incidence and the angle of refraction between two different media.

### Resource Link

[https://www.teachengineering.org/activities/view/uoh\\_invisible\\_activity1](https://www.teachengineering.org/activities/view/uoh_invisible_activity1)

Skills Label™

Patent 11587190

[www.skillslabel.com](http://www.skillslabel.com)

[Go to Label Webpage](#)